


Read

Tamra has 7 digital clocks in her house and only 2 circular or analog clocks. How many fewer circular clocks does Tamra have than digital clocks? How many clocks does Tamra have altogether?

Draw


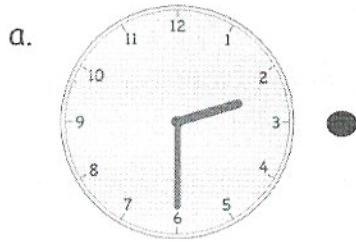


Write


Name _____


Date _____

1. Match the clocks to the times on the right.



● Half past 5 o'clock

● 

● 

● Five thirty

● Half past 12 o'clock

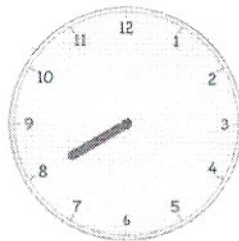
● Two thirty

2. Draw the minute hand so the clock shows the time written above it.

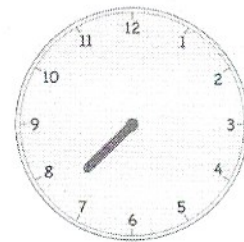
a. 7 o'clock



b. 8 o'clock



c. 7:30




d. 1:30



e. 2:30






f. 2 o'clock



3. Write the time shown on each clock. Complete problems like the first two examples.

<p>a.</p>  <p>3:30</p>	<p>b.</p>  <p>five thirty</p>	<p>c.</p>  <p>_____</p>
<p>d.</p>  <p>_____</p>	<p>e.</p>  <p>_____</p>	<p>f.</p>  <p>_____</p>
<p>g.</p>  <p>_____</p>	<p>h.</p>  <p>_____</p>	<p>i.</p>  <p>_____</p>
<p>j.</p>  <p>_____</p>	<p>k.</p>  <p>_____</p>	<p>l.</p>  <p>_____</p>

4. Circle the clock that shows half past 12 o'clock.



Name _____

Date _____

Draw the minute hand so the clock shows the time written above it.


1.

9:30



2.

3:30



3. Write the correct time on the line.