


Read

Kim drew 7 circles. Shanika drew 10 circles. How many fewer circles did Kim draw than Shanika?

Draw




Write

Name _____

Date _____

1. Match the clocks that show the same time.


a.




b.




c.






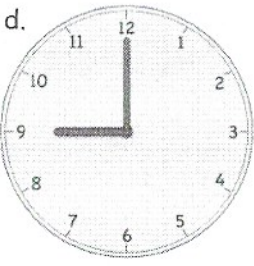

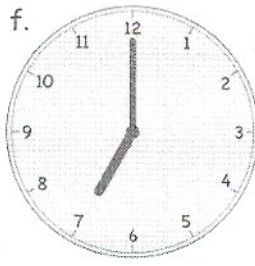




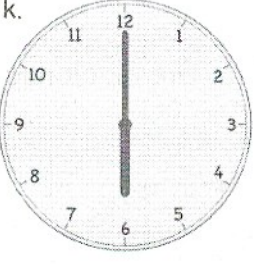


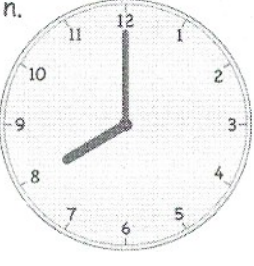
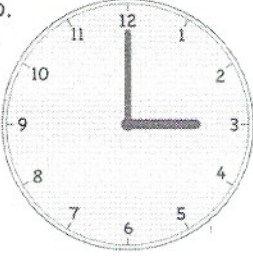
d.



2. Put the hour hand on this clock so that the clock reads 3 o'clock.



3. Write the time shown on each clock.

<p>a.</p>  <p>_____ : _____</p>	<p>b.</p>  <p>_____ o'clock</p>	<p>c.</p>  <p>_____ o'clock</p>
<p>d.</p>  <p>_____ o'clock</p>	<p>e.</p>  <p>_____ :</p>	<p>f.</p>  <p>_____ o'clock</p>
<p>g.</p>  <p>_____ :</p>	<p>h.</p>  <p>_____ o'clock</p>	<p>i.</p>  <p>_____ :</p>
<p>j.</p>  <p>_____ o'clock</p>	<p>k.</p>  <p>_____ :</p>	<p>l.</p>  <p>_____ o'clock</p>
<p>m.</p>  <p>_____</p>	<p>n.</p>  <p>_____</p>	<p>o.</p>  <p>_____</p>

Name _____


Date _____

Write the time shown on each clock.


1.



2.



3.



4.