
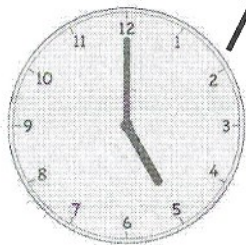
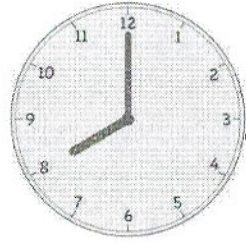


1. Match each clock to the time it shows.




5 o'clock

8 o'clock


6 o'clock

12 o'clock



The minute hand is pointing at the 12 on every clock. That means each time is "something o'clock"! To find the answer, I just look at the hour hand, which tells me what the hour is!

2. Put the hour hand on the clock so that the clock matches the time. Then, write the time on the line.



2 o'clock

_____ 2:00 _____


I have to make the hour hand point right at the 2. When the time is 2:00, the minute hand is pointing at the 12, and the hour hand is pointing right at the 2.

Name _____

Date _____

1. Match each clock to the time it shows.

a.



4 o'clock



b.



7 o'clock




c.



11 o'clock



d.




10 o'clock




e.



3 o'clock



f.




2 o'clock



2. Put the hour hand on the clock so that the clock matches the time. Then, write the time on the line.


a.



6 o'clock

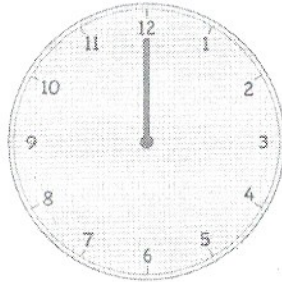
6:00

b.




9 o'clock

c.



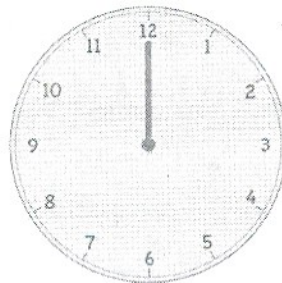
12 o'clock

d.



7 o'clock

e.



1 o'clock
